

# AMRITA VIDYALAYAM

## ANNUAL EXAMINATION 2017 - '18

Name : .....  
Class : I

Marks : 50  
Time : 2 hrs

### MATHEMATICS

#### KNOWLEDGE

**I. Fill in the blanks. 10**

- a) The numeral for ninety four is \_\_\_\_\_.
- b) In the word Horse, R is in the \_\_\_\_\_ position.
- c)  $16 + 0 =$  \_\_\_\_\_.
- d) There are \_\_\_\_\_ days in a week.
- e) \_\_\_\_\_ comes after Wednesday.
- f) The numbers 1, 2, 3, 4, 5, \_\_\_\_\_ are called \_\_\_\_\_ numbers.
- g) 5 groups of 10 pencils = \_\_\_\_\_.
- h) One more than 89 is \_\_\_\_\_.
- i) \_\_\_\_\_ is the first month of the year.
- j) 48, \_\_\_\_\_, 50

#### UNDERSTANDING

**II.1. Match the months with the celebrations. 5**

- | Months       | Celebrations     |
|--------------|------------------|
| a) September | Children's Day   |
| b) August    | Gandhi Jayanthi  |
| c) November  | Teacher's Day    |
| d) October   | Christmas        |
| e) December  | Independence Day |

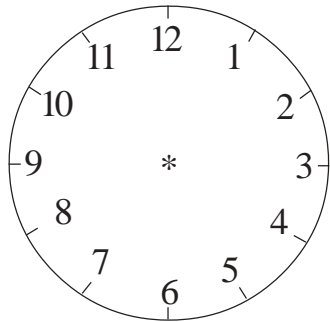
**2. Circle the biggest number. 2**

- a) 52, 58, 53
- b) 86, 89, 90




3. Draw the hands of the clocks to show the time given in the boxes. 2

a) 7 O' Clock




b) 12 O' Clock



4. Skip count in tens and colour the numbers. 5

1	2	3	4	5	6	7	8	9	10
11	12	13	14	15	16	17	18	19	20
21	22	23	24	25	26	27	28	29	30
31	32	33	34	35	36	37	38	39	40
41	42	43	44	45	46	47	48	49	50

5. Vikram is helping his mother to clean the fridge. He draws a chart of vegetables and fruits taken out of the fridge. 3





a) How many fruits are there in the fridge? \_\_\_\_\_



b) How many vegetables are there in the fridge? \_\_\_\_\_

c) Which are more, fruits or vegetables? \_\_\_\_\_

6. Fill in the ones and tens place and write the number.

2

a)  +  = \_\_\_\_\_ tens + \_\_\_\_\_ ones =  
\_\_\_\_\_

b)  +  = \_\_\_\_\_ tens + \_\_\_\_\_ ones =  
\_\_\_\_\_