

# AMRITA VIDYALAYAM

## ANNUAL EXAMINATION 2017 -'18

Name: .....

Class : II

Marks : 50

Time : 2 hrs

### MATHEMATICS

#### KNOWLEDGE

**I. Choose the correct answer from the brackets.** **5**

1. A standard unit for measuring big weight is \_\_\_\_\_.  
(gram, kilogram, litre)
2. One rupee has \_\_\_\_\_ paise. (10, 100, 1000)
3. Republic Day is in the month of \_\_\_\_\_.  
(January, August, September)
4. The answer of multiplication is called \_\_\_\_\_.  
(factor, quotient, product)
5. The last month of the year is \_\_\_\_\_.  
(January, November, December)

**II. Fill in the blanks.** **5**

1.  $6 \times 2 = \underline{\hspace{2cm}} \times 6$ .
2.  $1\text{m} = \underline{\hspace{2cm}} \text{cm}$ .
3.  $5 \times 0 = \underline{\hspace{2cm}}$ .
4. Quarter past 6 can also be written as \_\_\_\_\_.
5. A cube has \_\_\_\_\_ corners.

#### UNDERSTANDING

**III. Write true or false.** **4**

1. The earth is shaped like a rectangle. \_\_\_\_\_
2. The fifth month of the year is May. \_\_\_\_\_
3. 3 times seven is 21. \_\_\_\_\_
4. A triangle has two sides. \_\_\_\_\_

**IV. Match the following.**

4

- 1. Quarter past 9                      8:15
- 2. Quarter to 9                        9:30
- 3. Half past 9                         9:15
- 4. Quarter past 8                     8:45

**V. Convert the following.**

2

- 1. ₹ 6 = \_\_\_\_\_ p
- 2. 675 p = ₹ \_\_\_\_\_ and \_\_\_\_\_ p



**VI. Write multiplication facts.**

2

- 1.  $7 + 7 + 7 = \text{_____} \times 7$
- 2.  $5 + 5 + 5 + 5 + 5 = \text{_____} \times 5$

**VII. What will come next in the series?**

3

- 1.  \_\_\_\_\_
- 2.  $+$   $\times$   $=$   $+$  \_\_\_\_\_
- 3.  \_\_\_\_\_

**APPLICATION**

**VIII.1.** A packet contains 12 toffees. How many toffees will be there in 6 such packets?

2½

Number of toffees in a packet = \_\_\_\_\_

Number of packets = \_\_\_\_\_

Total number of toffees = \_\_\_\_\_

2. Arun had ₹ 62. He bought a comic book for ₹ 43. How much money is left with him?

2½

Amount Arun had = ₹ \_\_\_\_\_

Amount Arun spent = ₹ \_\_\_\_\_

Amount left with Arun = ₹ \_\_\_\_\_

## SKILL

### IX. Multiply.

4

$$\begin{array}{r} 1. \quad T \quad 0 \\ \quad 2 \quad 4 \\ \times \quad 2 \\ \hline \end{array}$$

$$\begin{array}{r} 2. \quad T \quad 0 \\ \quad 7 \quad 0 \\ \times \quad 3 \\ \hline \end{array}$$

### X. Add.

2

$$\begin{array}{r} \quad \quad P \\ \quad 52 \quad 25 \\ + 14 \quad 45 \\ \hline \end{array}$$

### XI. Subtract.

2

$$\begin{array}{r} \text{Kg} \quad \text{g} \\ 26 \quad 650 \\ - 22 \quad 510 \\ \hline \end{array}$$

### XII. Name the first 4 months in a year.

2

\_\_\_\_\_

\_\_\_\_\_

\_\_\_\_\_

\_\_\_\_\_

### XIII. Write 3 ways to make ` 6 using and coins.

3

1.   


2.    

3.      

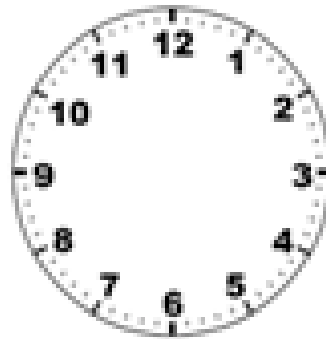
**XIV. Draw the hands to show the time.**

2

1. Half past 6



2. Quarter past 8



**XV. The table shows the favourite fruits of class 2 A.**

5

Fruits	Banana	Apple	Orange	Cherry
No. of children	4	3	8	2

1. Which fruit is liked by most children?

\_\_\_\_\_

2. How many like cherry?

\_\_\_\_\_

3. How many more children like orange than apple?

\_\_\_\_\_

4. Which fruit is liked least by children?

\_\_\_\_\_

5. How many children are there in the class 2 A?

\_\_\_\_\_