

AMRITA VIDYALAYAM

ANNUAL EXAMINATION 2018 - '19

Name :

Marks : 50

Class : I

Time : 2 hrs

MATHEMATICS

KNOWLEDGE

I. Fill in the blanks.

10

1. The number name of 50 is _____.
2. _____ has either 28 or 29 days.
3. The smallest 2-digit number is _____.
4. If today is Monday, tomorrow will be _____.
5. 24, _____, 26.
6. 6 tens and 8 ones = _____.
7. $10 + 70 =$ _____.
8. 4 o'clock is also written as _____.
9. One less than 31 is _____.
10. Circle the bigger number.
13, 83, 43

UNDERSTANDING

II. Match the numbers with their ordinal numbers.

5

1. 4 sixth
2. 8 nineth
3. 2 fourth
4. 6 second
5. 9 eighth

III. Write the first four days of the week.

2

1. _____
2. _____
3. _____
4. _____

IV. Rewrite numbers from smallest to biggest.

2

1. 26 54 39 _____ _____ _____
 2. 97 91 99 _____ _____ _____


V. Put the correct symbol (<, = or >).

2

1. 79 _____ 39 2. 16 _____ 16 3. 20 _____ 40 4. 67 _____ 71

VI. Colour the third and fifth kite.

2



VII. Name the months in which they are celebrated.

2

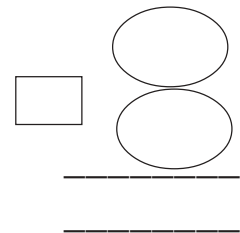
1. Christmas _____
 2. Teachers' day _____

APPLICATION

VIII.1. There are 45 oranges and 23 apples in a basket. How many fruits in all? 2½

Number of oranges

Number of apples



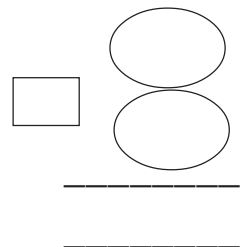
There are _____ fruits in all.

2. Sonu has 36 crayons. He gave 20 crayons to Rahul. How many crayons are left with Sonu?

2½

Total number of crayons with Sonu

Number of crayons given to Rahul



There are _____ crayons left.

SKILL

IX. Skip count in 5's.

2



X. Add.**4**

$$\begin{array}{r} 1. \quad 70 \\ + \quad 4 \\ \hline \end{array}$$

$$\begin{array}{r} 2. \quad 13 \\ + \quad 14 \\ \hline \end{array}$$

$$\begin{array}{r} 3. \quad 39 \\ + \quad 10 \\ \hline \end{array}$$

$$\begin{array}{r} 4. \quad 42 \\ + \quad 2 \\ \hline \end{array}$$

XI. Subtract.**4**

$$\begin{array}{r} 1. \quad 83 \\ - \quad 11 \\ \hline \end{array}$$

$$\begin{array}{r} 2. \quad 66 \\ - \quad 23 \\ \hline \end{array}$$


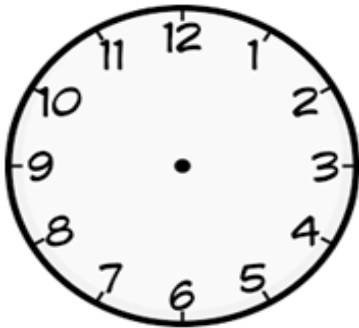
$$\begin{array}{r} 3. \quad 97 \\ - \quad 4 \\ \hline \end{array}$$

$$\begin{array}{r} 4. \quad 54 \\ - \quad 3 \\ \hline \end{array}$$

XII. Draw the hands of the clock to show the time.**2**

1. 8 o'clock

2. 6 o'clock

**XIII. The following chart shows the means of transport by which students of class I come to school and the number of students travelling by those.****3**

Bus	20
Car	5
Van	14
On foot	8

1. How many students come by bus? _____

2. How many students come by van? _____

3. Which means of transport is least used? _____

XIV. Join the dots from the number 31 and colour it.

